


Warm Up: Making Green Paint with Proportion Playground

You can use **ratio language** to describe the relationship between the rabbits to pigs:

- The ratio of pigs to rabbits is 5 : 4
- The ratio of rabbits to pigs is 4 : 5
- There are 5 pigs for every 4 rabbits
- There are 4 rabbits for every 5 pigs

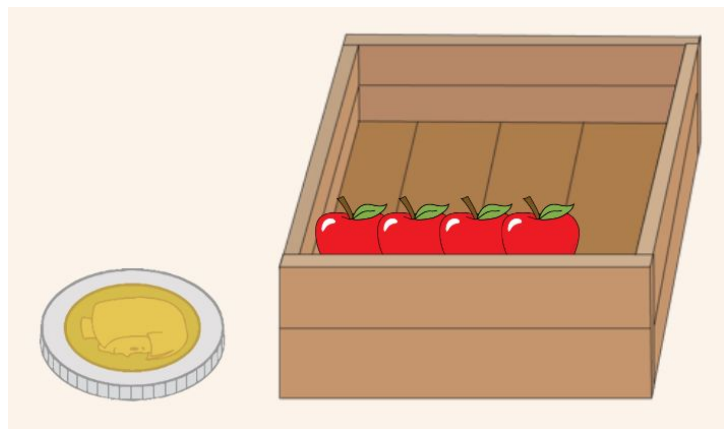


In #1-3, use ratio language to describe the ratio between each pair of quantities.

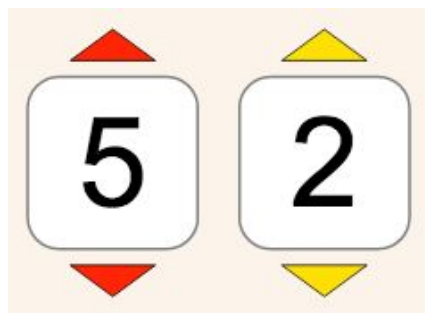
1.



2.



3.



4.

